



Daily Review #2

NAME _____

SCORE _____ / 12


1) Multiply 45×312 . _____

2) What is the special name for a triangle with three unequal sides? _____

3) What integer is four units to the right of 5 on the number line? _____

4) Evaluate $\sqrt{16}$. _____

5) What fraction of the rectangle is shaded? _____



6) An ice cream survey was taken and the results were tallied in the chart below. What is the difference between the most and least popular flavors? _____

Favorite Ice Cream

Vanilla	/
Chocolate	/
Strawberry	
Butter Pecan	

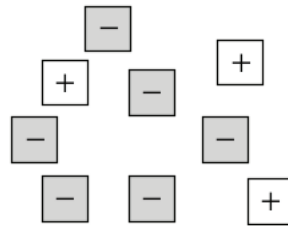


Daily Review #2

NAME _____

SCORE _____ / 12

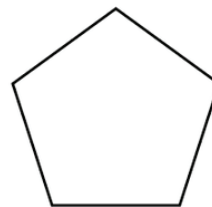
7) What number is represented by the algebra tiles at right?



8) Divide 5,075 by 25.

9) Evaluate $\sqrt{1}$.

10) What is the name of the shape at right?



11) Which number is further left on a number line: -2 or -6 ?

12) What number is the opposite of $+14$?



The Math Institute
Led by Michael Waski

www.themathinstitute.org

STOP!

**Answer Key can be found
on the following pages**

NO PEEKING!

Like what you see?

Head to themathinstitute.org
today to purchase our Integrated
Math Daily Review Sets!



Answer Key

#2

1) 14,040

2) *scalene*

3) +9 *or* 9

4) 4

5) $\frac{3}{5}$

6) 6 *people*

7) -3

8) 203

9) 1

10) *pentagon*

11) -6

12) -14